

Week 31 Homework



Name  American egg

Exploring Careers

There are many amazing careers in our world. A career is a job that a person does for a long time. People spend many years learning how to do their jobs well.

Some people work as veterinarians. They are animal doctors who help pets stay healthy. Being a veterinarian is the best job because you get to play with puppies and kittens all day. Other people work as chefs. They cook delicious meals in restaurants. Everyone thinks that pizza is the tastiest food a chef can make.

Construction workers build our homes and schools. They wear hard hats and use heavy tools to stay safe. Their job is much more exciting than working in an office. Teachers work in schools to help students learn. They use books, computers, and whiteboards. Most people agree that teachers are the most important workers because they help us grow.

Choosing a career is a big decision. It is important to find a job that you enjoy!

Directions: Answer the questions. Underline where you found your answers in the text.

1. Which of these is a FACT from the text?

- A. Being a veterinarian is the best job in the world.
- B. Teachers use books, computers, and whiteboards to help kids learn.
- C. Pizza is the tastiest food a chef can make.

2. Based on the passage, what is a FACT about construction workers?

- A. Their job is more exciting than working in an office.
- B. They wear hard hats and use heavy tools.
- C. They have the hardest job of all the careers.




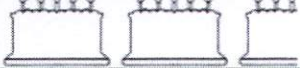
3. The author says, "Being a veterinarian is the best job because you get to play with puppies and kittens all day." Is this a fact or an opinion? How do you know?


An opinion because not all people think that being a veterinarian is the best job.

4. Write one FACT about a career you are interested in. Then, write one OPINION about that same career.

- Career: Doctor
- Fact: they use x-rays
- Opinion: I think that doctors are the best jobs

Week 31 Homework

Birthday Season	
Winter	
Spring	
Summer	
Fall	

each  = 2 students

Answer the following questions about the graph above.

1. How many students are celebrating birthdays in all? 24

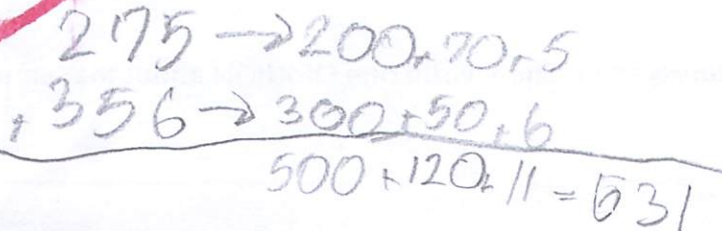
2. How many students have summer birthdays? 8

3. How many more students are celebrating summer birthdays than spring birthdays? 4

Addition review:

Solve the following addition problem. Show your work.

$$275 + 356 = ?$$



$$\begin{array}{r} 275 \rightarrow 200 + 70 + 5 \\ + 356 \rightarrow 300 + 50 + 6 \\ \hline 500 + 120 + 11 = 631 \end{array}$$